

FIRST SCHOOL LEAVING CERTIFICATE EXAMINATION - 2012 SESSION

FRENCH: ORALS
(10 marks)

Consignes pour l'examineur

Durée : 05 minutes au plus.

Structure :

A/ Mise en train

Saluer le candidat, le mettre en confiance afin d'amener à commencer à réfléchir en français.

Exemple : Bonjour mon ami ! Comment vas-tu ? Comment t'appelles-tu ?

B/ Conversation/06 point

L'examineur pose des questions qui permettent d'engager une conversation réaliste et authentique avec le candidat en tenant compte de son niveau.

Note : Quatre questions de conversation (4 points) et un chant ou une récitation (2 points) pour chaque candidat. L'examineur vérifie l'expression libre, le vocabulaire, le respect de la structure des énoncés, la compréhension.

Exemple : Quel est le nom de ton école ? Est-ce que tu apprends le français dans ton école ? Qu'est-ce que tu aimes dans ton école ? Peux-tu chanter en français ? Peux-tu me dire une récitation en français ? Quels sont les vêtements que tu portes ? Quelles sont les couleurs du drapeau ? ... Quels sont les jours de la semaine ? Que fais-tu souvent le samedi ? Le dimanche ? ... Quel est ton animal préféré ? Quel est le repas que tu aimes ? Pourquoi ?

C/ Lecture /03 points

Le candidat lit un texte de trois à cinq phrases. Pendant ce temps, l'examineur révalue le respect du rythme, de l'intonation et la lecture expressive (respect de la ponctuation) du candidat.

D/ Fin de l'oral :

L'examineur ramène le candidat à son niveau de connaissance et de communication normale, le remercie et prend congé de lui.

Exemple :

C'est bien ! Vas-tu continuer à apprendre le français au collège...?

Merci ! Au revoir mon ami/amie.

Aimerais-tu être bilingue ? Qu'est que tu faire pour être bilingue?...

Très bien, merci et au revoir.

Présentation /01 points

FIRST SCHOOL LEAVING CERTIFICATE EXAMINATION – 2012 SESSION

FRENCH: SECTION I (DICTATION PASSAGE)

Time Allowed: 20 Minutes

Consignes pour l'examineur

L'examineur lit les cinq phrases à une vitesse normale. Pendant ce temps, les candidats écoutent attentivement sans rien écrire.

Après cette lecture, l'examineur relit lentement les phrases une à une et les candidats complètent les phrases avec les mots qui manquent.

L'examineur procède à une troisième lecture de l'ensemble des cinq phrases. Il accorde ensuite trois minutes aux candidats pour relire leurs dictées avant de ramasser les feuilles de composition.

DICTÉE : (10 points)

1. A quelle heure est prévu le vol de Douala?
2. Il faut brosser ses dents chaque jour.
3. La grand-mère de Julia aime la kola.
4. Les élèves jouent dans la cour de récréation.
5. Pierre a un beau chat blanc sur sa table.

FIRST SCHOOL LEAVING CERTIFICATE EXAMINATION - 2012 SESSION

SUBJECT:
**INFORMATION & COMMUNICATION
TECHNOLOGY**

NAME: _____

EXAM. NO: _____

CENTRE CODE: _____

Do not write here. ↓
CODE: _____

For Official Use Only

Score: ○

Marked by: _____
(Name and Signature)

Checked by: _____

Do not write here. ↓
CODE: _____

FIRST SCHOOL LEAVING CERTIFICATE EXAMINATION - 2012 SESSION
INFORMATION AND COMMUNICATION TECHNOLOGY (ICT) - (20 marks)

Time Allowed: 1 hour

Answer all Questions


1. You have just passed your common entrance examination and you want to inform your elder brother who is in London. The following are some of the means through which you can send him the information. Underline the faster and fastest means of sending him the message. (2 marks)

Postal mail, e-mail, SMS.

2. a). At the ICT corner of your classroom, one can find the following tools: a gong, a flute, a drum, a balaphon, a radio set, a television set, a bell, a mobile telephone, camera and a computer. In the table below, classify these tools into traditional and modern. (5 marks)

N°	Traditional tools	Modern tools
1		
2		
3		
4		
5		

- b) The image below is that of a desktop computer and the letters A to D represent some of its parts. Using the answers provided below, label the parts to their corresponding letters. (4 marks)



- A. _____
B. _____
C. _____
D. _____

Answers: Monitor, mouse, keyboard, Central Processing Unit.

FIRST SCHOOL LEAVING CERTIFICATE EXAMINATION - 2012 SESSION

EVALUATION FORM FOR MUSIC

NAME OF CANDIDATE: _____

DATE AND PLACE OF BIRTH: _____ SEX: (Male / Female) _____

CENTRE: _____

CENTRE CODE NO. : _____

EXAMINATION NO.: _____

	DOMAIN OF EVALUATION	SCORE				
		1	2	3	4	5
1.	Possession of song book (state, decoration, existence of National Anthem, other songs)					
2.	Singing of the National Anthem (articulation of words, pitch, rhythm, melody)					
3.	Singing of one of the candidate's songs (message, use of instruments, gestures, etc)					
4.	Oral questions on sol-fa notation/musical instruments.					

Total mark (20 ÷ 2) = 10

Done at : _____ on the _____

Name and Signature of members of Jury : 1 _____

2 _____

3 _____

Name / Signature of Chief Examiner _____

FIRST SCHOOL LEAVING CERTIFICATE EXAMINATION - 2012 SESSION

MUSIC (Oral) (10 marks)

The music examination will be taken by all candidates orally. Candidates are required to come along with their song books which must contain the National Anthem in either English or French or both, and four other occasional songs. All candidates must sing the National Anthem and any other song of their choice. Examiners are reminded that grading of songs will be based on the fact that singing entails rhythm, pitch, articulation of words, rhyme and melody. Candidates will be required to answer questions on the message of the songs. Candidates who blend their singing with musical instruments will have an advantage.

Examiners are instructed to use the marking guide that has been provided for this exercise in order to maintain consistency.

FIRST SCHOOL LEAVING CERTIFICATE EXAMINATION – 2012 SESSION

ENGLISH LANGUAGE PAPER I (*Time Allowed: 1 hour 15 minutes.*)

SECTION A: DICTATION (10 marks) *Time Allowed: 15 minutes*

INSTRUCTIONS TO INVIGILATORS:

1. Give out the dictation answer sheets and those of sections **B**, **C** and **D** to the candidates. Make sure they complete the details at the top of the sheets.
2. For the dictation, tell the candidates that they have 15 minutes from the time you begin reading the dictation passage.
3. The first reading of the passage should be at normal speed. Candidates should listen attentively but should not write anything.
4. Read the passage a second time in sections as indicated so that the candidates listen and write what they hear. Read each section twice and give a few seconds for writing. Punctuation marks should be read out and no other information should be given.
5. Read the passage the third time at normal speed. The three (3) readings of the dictation passage should take about ten (10) minutes.
6. Allow five (5) minutes for candidates to check their work.
7. After 15 minutes from the start of the first reading, collect the answer sheets for the dictation, envelop and seal them.
8. Tell the candidates they have the rest of the time to complete sections **B**, **C**, and **D**.

DICTATION PASSAGE (10 marks)

The headteacher told the pupils, / “learning is not always easy / for anybody. / You may need someone/ to teach you. / You also need to practise. / Practice is doing something / over and over. / Usually, lazy people find learning difficult. / So, they have to work hard. / They should try and try again, / and never give up”.

FIRST SCHOOL LEAVING CERTIFICATE EXAMINATION 2012 SESSION

SUBJECT:
ENGLISH LANGUAGE PAPER I
(Guided Writing & Composition)

NAME: _____

EXAM. NO: _____

CENTRE CODE: _____

CODE:

Do not write here. ↓

For Official Use Only

Score: ○

Marked by: _____

(Name and Signature)

Checked by: _____

Do not write here. ↓

CODE:

FIRST SCHOOL LEAVING CERTIFICATE EXAMINATION - 2012 SESSION

ENGLISH LANGUAGE PAPER I

Time Allowed: 1 hour 15 minutes.

GUIDED WRITING AND COMPOSITION

SECTION C: GUIDED WRITING - (10 Marks)

Re-arrange the sentences below in the spaces provided so that they form a meaningful story.

- 1) The monkey pulled the lion from the hole with its tail.
- 2) The lion needed the monkey's help.
- 3) One day, a lion fell into a hole.
- 4) A tortoise appeared in the scene of the struggle.
- 5) The lion wanted to eat the monkey.
- 6) A monkey was passing by the hole.
- 7) The monkey cried out for its freedom.
- 8) The monkey thanked the tortoise and they went their way.
- 9) The tortoise tricked the lion to fall into the hole again.
- 10) The lion finally died in the hole.

1. _____

2. _____

3. _____

4. _____

5. _____

6. _____

7. _____

8. _____

9. _____

10. _____

FIRST SCHOOL LEAVING CERTIFICATE EXAMINATION - 2012 SESSION

SUBJECT:
MATHEMATICS PAPER I

NAME: _____

EXAM. NO: _____

CENTRE CODE: _____

Do not write here. ↓
CODE: _____

For Official Use Only

Score: ○

Marked by: _____
(Name and Signature)

Checked by: _____

Do not write here. ↓
CODE: _____

FIRST SCHOOL LEAVING CERTIFICATE EXAMINATION - 2012 SESSION

MATHEMATICS PAPER I Time Allowed: 30 minutes.

INSTRUCTIONS:

Solve all the problems. You can use scraps of paper to solve the problems but only the correct answers should be written in the spaces provided from 1 - 30. Each problem carries a mark.

- 1) Add the following numbers: 3.45, 14.050, 8.319, 41.3. 1. = _____
- 2) Divide 5580 by 225. 2. = _____
- 3) Multiply 489 by 395. 3. = _____
- 4) A trader has 50 eggs and 10 were bad. What fraction was bad? 4. = _____
- 5) Fifteen pupils out of 45 failed in a test. What percentage failed? 5. = _____
- 6) Mr. Ndonggo bought a car for 360,000 frs and sold it for 400,000 frs. What is his profit? 6. = _____
- 7) The speed of your father's car is 90 km per hour. How far will it go in 25 minutes? 7. = _____
- 8) In 1980, a father's age was five times his son's age. In 1985, his son was 15 years old. How old was his father in 1980? 8. = _____
- 9) Out of the 250 children in class four, $\frac{2}{5}$ of them were late this morning. How many children came early? 9. = _____
- 10) Simplify this fraction. $\left(\frac{2}{3} + \frac{1}{2}\right) - \left(\frac{2}{3} - \frac{1}{3}\right)$ 10. = _____
- 11) Four boys in class five have the following weights. 65 kg, 70 kg, 45 kg and 67 kg. What is their average weight? 11. = _____
- 12) The area of my square box is 289 cm². What would be its perimeter? 12. = _____
- 13) A man is paid 4,400 frs for 4 days' work. How much will he earn for 9 days working at the same rate? 13. = _____

FIRST SCHOOL LEAVING CERTIFICATE EXAMINATION - 2012 SESSION

SUBJECT: FRENCH II (GRAMMAIRE, VOCABULAIRE ET COMPREHENSION DE TEXTE)	NAME: _____
	EXAM. NO: _____
	CENTRE CODE: _____
	Do not write here. ↓
	CODE: _____

For Official Use Only

Score: ○	
Marked by: _____ (Name and Signature)	Do not write here. ↓
Checked by: _____	CODE: _____

FIRST SCHOOL LEAVING CERTIFICATE EXAMINATION - 2012 SESSION

FRENCH : SECTION II Time Allowed : 60minutes

GRAMMAIRE, VOCABULAIRE ET COMPREHENSION DE TEXTE (40 points)

I - GRAMMAIRE (10 points)

Exercice 1 : (2.5 points)

Lis attentivement le texte suivant où Julia parle de son petit déjeuner. Complète chaque espace vide avec l'un des adjectifs, qualificatifs entre parenthèses.

Hier matin, maman m'a servi une _____ (bon, bonne) tasse de lait avec du chocolat bien _____ (chaud, chaude). J'ai mangé un morceau de pain tartiné avec du fromage _____ (frais, fraîche). J'ai aussi mangé des œufs _____ (frits, frites). Quand j'ai terminé mon déjeuner, elle m'a donné une paire de chaussures _____ (neufs, neuves) que tante Maggi a apportée la veille.

Exercice 2 : (4 points)

Lis les phrases suivantes et complète les avec l'adjectif possessif qui convient suivant l'exemple.

Exemple: Lynn prends son petit déjeuner au restaurant de sa tante. (sa, son)

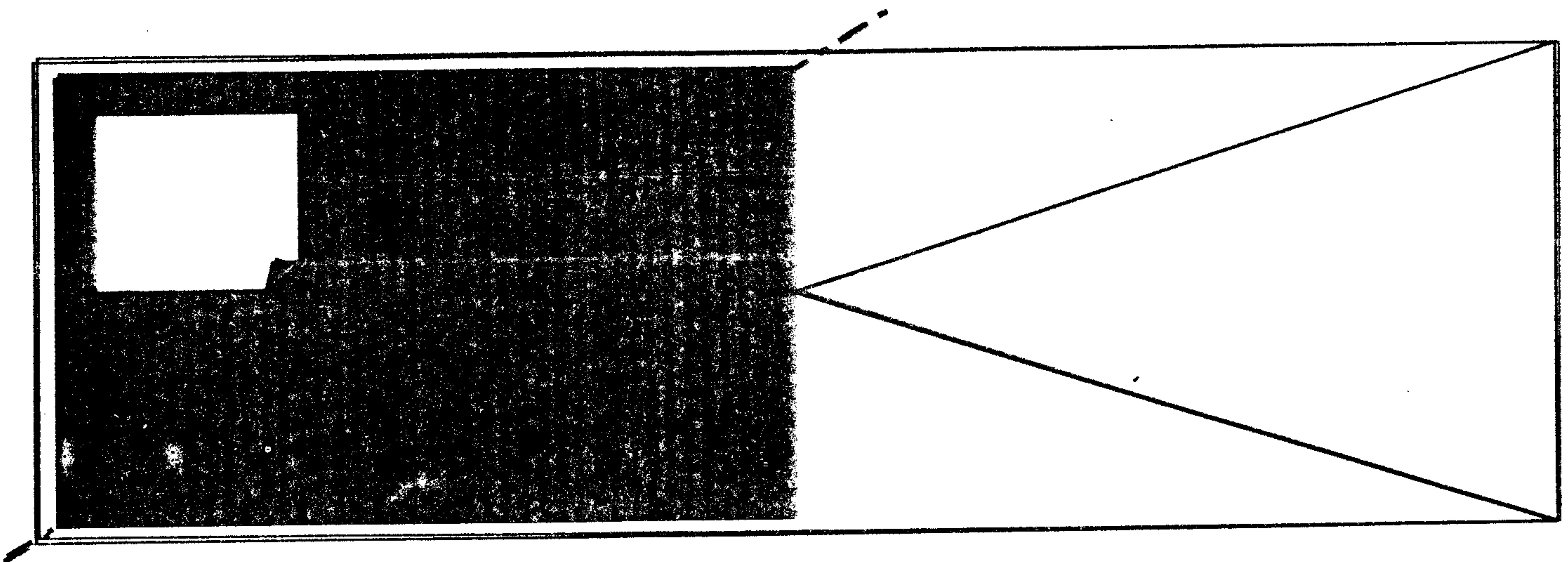
1. Pierre a mis _____ cahiers et crayons dans _____ cartable. (son, ses).
2. Naomi joue avec _____ cousin dans _____ chambre. (sa, son).
3. Le maître corrige les cahiers de _____ élèves avec _____ stylo rouge. (son, ses).
4. Marie dit que _____ parents viennent dîner dans _____ hôtel ce soir. (ses, notre).

Exercice 3 : (2 points)

Lis les phrases suivantes et complète les avec la préposition qui convient (derrière, sur, sous, dans).

Exemple : Le chat est sur la table.

1. Mes cahiers sont _____ mon cartable.
2. Les lunettes de mon père sont _____ la table.
3. Les toilettes sont _____ les salles de classe.
4. Le chat est caché _____ le lit.



II - VOCABULAIRE (10 points)

Exercice 1 : (5 points)

Lis les phrases suivantes. Complète les avec l'un des noms de lieu qui convient pris dans les parenthèses.

1. Quand ma mère veut acheter des médicaments, elle va à _____ . (la pharmacie, la boutique)
2. Les enfants ont faim. Je les amène manger dans _____ . (une salle de cinéma, un restaurant)
3. Quand on condamne les voleurs, on les envoie à _____ . (la banque, la prison)
4. Pierre va acheter des timbres à _____ pour envoyer ses lettres. (la boulangerie, la poste).
5. Les musulmans prient à _____ . (l'église, la mosquée)

Exercice 2 : (2.5 points)

Voici la liste de quelques animaux que tu connais dans la colonne A et les verbes qui expriment leurs cris dans la colonne B. Associe l'animal au verbe de son cri comme dans l'exemple.

Colonne A

chat
serpent
bœuf
coq
cheval
pigeon

Colonne B

siffle
chante
roucoule
beugle
miaule
hennit

Exercice 3 : (4 points)

Voici des phrases qui décrivent des états. Complète les avec les expressions suivantes:

Il est sourd - elle a faim - il a soif - il est aveugle.

1. Paul veut boire de l'eau. _____
2. Maggi n'a pas mangé depuis deux jours. _____
3. Samba a perdu la vue depuis le mois passé. _____
4. Pourquoi ne répond-il pas à mes questions ? _____

III - COMPREHENSION DE TEXTE (20 points)

Lis attentivement le texte suivant et réponds en cochant la réponse correcte ou en écrivant une courte phrase.

La tombola Coca-cola

Les Brasseries du Cameroun ont organisé une compétition : il faut décapsuler une bouteille de coca-cola, vérifier sous la capsule si on a gagné le ticket du voyage - Aller et retour Cameroun Angola, pour assister aux matchs de la Coupe de la Confédération Africaine de Football.

Un jour, M. Boma Oliver a acheté une bouteille de Coca-cola à son ami Joseph Fouda. Après avoir décapsulé la bouteille, Fouda a découvert qu'il a gagné le ticket du voyage d'Angola. Boma a voulu récupérer la capsule. Subitement, une bagarre s'est déclenchée entre les deux amis. C'est ainsi que pendant la bagarre, la capsule a disparu. Un passant a ramassé la capsule et s'est précipité à la Direction des Brasseries pour récupérer le ticket de voyage Aller et retour. Les trois se sont retrouvés ensemble !

Réponds aux questions :

I - Coche la bonne réponse

1. Le jeu Concours est organisé par l'Angola les Brasseries Coca-cola
2. Pour gagner, il faut
 acheter une bouteille de coca-cola.
 acheter une bouteille de coca-cola et regarder le dessin du ticket sous la capsule.
 acheter une capsule de coca-cola

II - Réponds aux questions en une phrase.

1. Qu'est-ce qui s'est passé entre Boma et son ami Fouda ?

2. Qu'est-il arrivé à la capsule de coca-cola ?

III - Qui a finalement gagné le ticket du voyage Cameroun - Angola ? Coche la réponse correcte.

- Boma Fouda on ne sait pas

FIRST SCHOOL LEAVING CERTIFICATE EXAMINATION - 2012 SESSION

SUBJECT:
GENERAL PAPER I

NAME: _____

EXAM. NO: _____

CENTRE CODE: _____

Do not write here. ↓
CODE: _____

For Official Use Only

Score: ○

Marked by: _____
(Name and Signature)

Checked by: _____

Do not write here. ↓
CODE: _____

FIRST SCHOOL LEAVING CERTIFICATE EXAMINATION - 2012 SESSION

GENERAL PAPER I (60 marks)

Time Allowed : 90 minutes

HISTORY, GEOGRAPHY AND CITIZENSHIP (CIVICS, HUMAN RIGHTS AND MORAL EDUCATION)

Candidates are required to answer all the questions in ALL the sections.

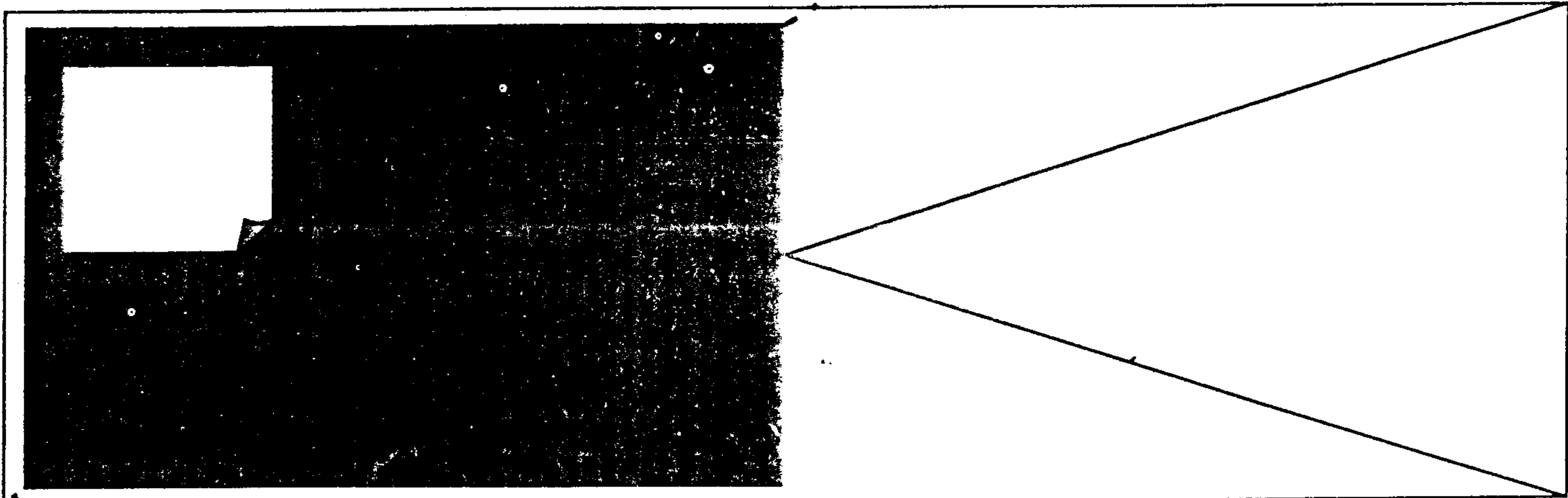
SECTION A: HISTORY (15 Marks)

For questions 1 – 5, write down the correct answer in the spaces provided. Each question carries 1 mark.

1. The Early man made several discoveries. Which of them led him to a settled life? _____
2. The coming of Europeans to Cameroon was characterised by missionary activities. What is the name of the Baptist missionary who set up the first school in Victoria (Limbe)? _____
3. The German Explorer, Zintgraff, signed treaties with some Cameroonian Chiefs during his penetration into the hinterland. Write down the name of the Fon of Bali who signed a blood pact with him. _____
4. During the German occupation of Cameroon, there were some natives who resisted their rule. Give the name of any one group of the natives who resisted German rule. _____
5. At the end of the First World War, Cameroon was partitioned between France and Britain and was to be administered as a mandated territory. Which International Organisation supervised the administration of mandated territories? _____

For questions 6–15, select the correct answers from the list below and fill in the spaces provided.(10 marks)

6. The Berlin Conference was held in 1884 to decide on the partition of Africa. Who convened the conference? _____
7. Apartheid was a system of government practised in South Africa. The first black President in South Africa who fought against Apartheid was _____
8. The “Chariot of the Gods” referred to Mount Cameroon. Which Nationals gave this name? _____



9. Democracy is a Government for the people by the people. Name the Greek city state in which Democracy started. _____
10. Slave trade was the buying and selling of human beings. Give the name of the person who fought for the abolition of slave trade in Britain. _____
11. During the Annexation of Cameroon by the Germans, a treaty was signed between the German traders and the Cameroonian Chiefs. Write the name of one of the Douala Chiefs who signed on behalf of Cameroon. _____
12. German administration in Cameroon witnessed several construction works. Name any German Relic in Cameroon. _____
13. Limbe is a town in the South West Region. What was it called in the colonial days? _____
14. Egypt is referred to as the “cradle of civilisation”. One of the things mankind has inherited from Egyptian civilisation is _____
15. The first ever President of Cameroon was Amadou Ahidjo. On the 6th of November 1982 he handed over to _____

Answers

King Akwa, Dr. Natchtigal, Victoria, Calendar, Carthaginians, Bismark, Foncha, Athens, Paul Biya, William Wilberforce, Nelson Mandela, The Prime Minister’s Lodge in Buea, Jacob Zuma, Portuguesse.

SECTION B: GEOGRAPHY (15 Marks)

For questions 1 – 10, write down the correct answers in the spaces provided. Each question carries 1 mark.

1. Rainfall, Temperature and Wind direction are some Weather elements. Which instrument is used to determine the direction of the wind? _____
2. The earth’s surface is made up of land masses and water bodies. A piece of land surrounded by water is called _____
3. Mountains that erupt from time to time are known as volcanic mountains. Name any volcanic mountain in West Africa _____
4. The Solar system is made up of nine planets. Which is the largest planet? _____
5. Day and night are caused by some movements of the earth. What is this movement called? _____
6. Oceans are large bodies of water. What is the name of the Ocean that washes the coast of Cameroon? _____
7. The Administrative Capital of Cameroon is Yaounde. Which is the Economic Capital of Cameroon? _____

8. A lake is a body of water surrounded by land. Name the largest lake in Africa. _____
9. Latitudes are imaginary lines running across the Globe from East to West. Name the Latitude that cuts the earth into two equal parts. _____
10. The world has different types of vegetation. Name the grassland type which is found in Argentina _____

For questions 11 – 20, mark an (X) on the letter that corresponds with the correct answer. Each question carries half (1/2) mark).

11. Cameroon has several game reserves. What is the name of the game reserve in Northern Cameroon?
 A) Maroua B) Limbe C) Mokolo D) Waza **A B C D**
12. Tea is one of the commercial crops produced in Cameroon. Two areas where tea is produced in Cameroon are: A) Tiko and Buea B) Edea and Limbe C) Ndu and Tole D) Ndu and Edea **A B C D**
13. Some countries in the world are thickly populated while others are less populated. Which is the most populated country in the world? A) Nigeria B) Asia C) China D) France **A B C D**
14. Most kitchen utensils are made out of aluminium. From which mineral is aluminium produced?
 A) Gold B) Tin C) Bauxite D) Lead **A B C D**
15. Several geographical features are found in Cameroon. What is the land mass that is high and flat at the top called? A) Valley B) Mountain C) Plateau D) Hill **A B C D**
16. Countries in the world have their respective capital cities. Which is the capital of Egypt?
 A) Lagos B) Tunis C) Cairo D) Paris **A B C D**
17. Animals are used in some regions as means of transport. Name the animal used as means of transportation in the Tundra regions. A) Camel B) Reindeer C) Donkey D) Horse **A B C D**
18. Electricity and potable water supply in Cameroon are run by cooperation. The cooperation that is incharge of electricity in Cameroon is
 A) CRTV B) AES SONEL C) CAMWATER D) SONARA **A B C D**
19. A desert is a dry extensive land mass. The desert found in the northern part of Africa is Called
 A) Sahel B) Kalahari C) Sahara D) Dry land **A B C D**
20. Cameroon Development Cooperation (CDC) produces Agricultural products. Where is its headquarters found? A) Douala B) Bota C) Yaounde D) Kribi **A B C D**

SECTION C: CITIZENSHIP (Civics, Moral Education and Human Rights Education)

I- Civics (10 marks)

For questions 1 – 5, fill the spaces provided with suitable answers. (1 mark each).

1. Regions in Cameroon are headed by Governors. How many Governors are there in Cameroon? _____
2. The National Assembly in Cameroon is a Law-making Institution. What is the name of the Speaker of the Assembly?

3. There are several Newspapers in Cameroon. Name the Government Newspaper _____
4. The Cameroon National Emblems are the Flag, Anthem, Seal, the Motto and Code of Arms. Name any features found on the Code of Arms. _____
5. A primary school is headed by an Authority. What do we call this Authority? _____

Match the events in column A with their corresponding dates in column C by writing the letter that corresponds to the correct answer in column B.

A	B	C
6. Plebiscite in Southern Cameoon	_____	A - 1914 – 1918
7. The Referendum	_____	B - 5 th October
8. German Annexation of Cameoon	_____	C - 11 th February 1961
9. First World War	_____	D - 20 th May 1972
10. Internatioal Teacher's Day	_____	E - 14 th July 1884

II - Moral Education (10 marks)

Provide suitable answers in the spaces provided.

1. It is not advisable to drink alcohol. State any two effects of alcohol.
i) _____ (1 mark)
ii) _____ (1 mark)
2. Late coming, truancy and absenteeism have negative effects on pupils. State any two of the effects.
i) _____ (1 mark)
ii) _____ (1 mark)
3. A child is a blessing to his/her parents. State two things that a child can do to make his/her parents happy.
i) _____ (1 mark)
ii) _____ (1 mark)
4. HIV/AIDS is a deadly disease but it can be controlled. State two ways that HIV/AIDS can be prevented.
i) _____ (1 mark)
ii) _____ (1 mark)
5. Christians and Moslems have Feast days that they celebrate all over the world. Name.
i) Any Christian Feast Day _____ (1 mark)
ii) Any Moslem Feast Day _____ (1 mark)

III - Human Rights Education (10 marks)

Write down the correct answers in the spaces provided.

1. John is 11 years old but stays at home without attending school. Which right of John is being abused?
_____ (1 mark)
2. Mary's parents do not allow her to attend Church service on Sundays. Which aspect of her freedom is being violated?
_____ (1 mark)
3. The state has some responsibilities towards its citizens. Write down any one of such responsibilities.
_____ (1 mark)
4. Child abuse deprives children of their rights. State two types of child abuse.
i) _____ (1 mark)
ii) _____ (1 mark)
5. When a child is born, a document has to be established with information about the child. What is the name of this document?
_____ (1 mark)
6. Every child has the right to live. State any two things a parent can do to a child to fulfil this right.
i) _____ (1 mark)
ii) _____ (1 mark)
7. A Nigerian citizen is different from a Cameroonian citizen. State any two things that can identify you as a Cameroonian.
i) _____ (1 mark)
ii) _____ (1 mark)

FIRST SCHOOL LEAVING CERTIFICATE EXAMINATION - 2012 SESSION

SUBJECT: ENGLISH LANGUAGE PAPER II	NAME: _____
	EXAM. NO: _____
	CENTRE CODE: _____
	CODE: _____ <small>Do not write here.</small>

For Official Use Only

Score: <input type="text"/>	
Marked by: _____ <small>(Name and Signature)</small>	CODE: _____ <small>Do not write here.</small>
Checked by: _____	

FIRST SCHOOL LEAVING CERTIFICATE EXAMINATION - 2012 SESSION
ENGLISH LANGUAGE PAPER II

Time Allowed: 60 Minutes.

GENERAL INSTRUCTIONS:

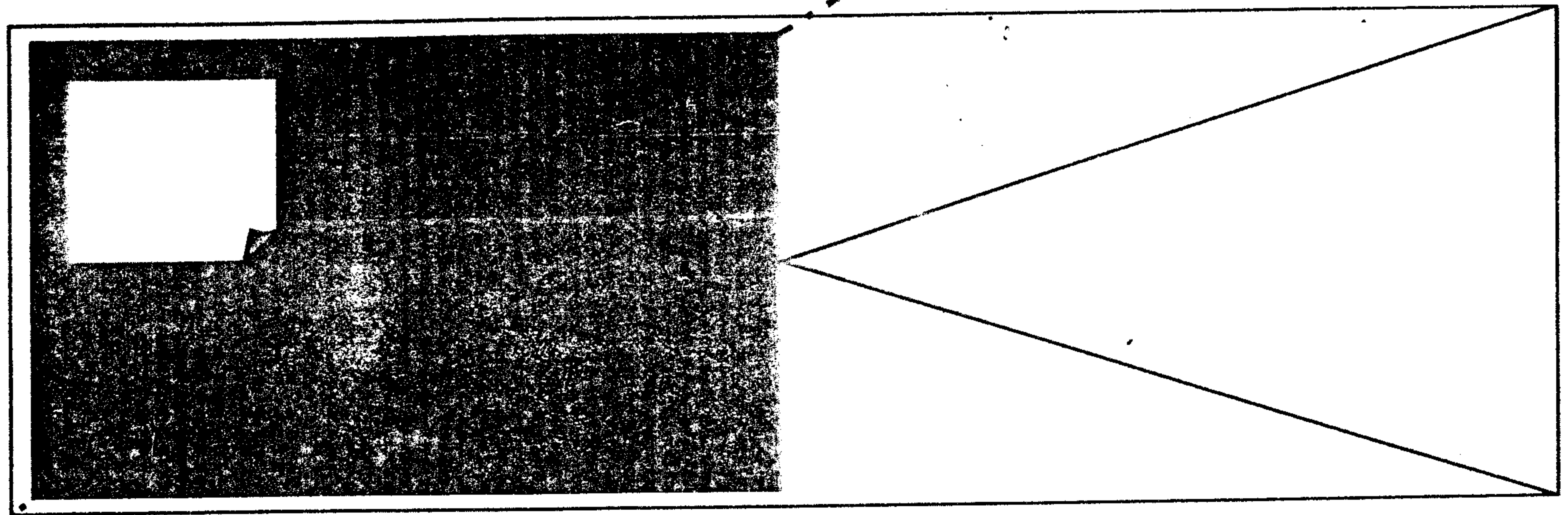
Read the instructions carefully before attempting to answer any question.

- 1) Answer all the questions in sections A, B and C.
- 2) In sections where you have to choose one out of four possible answers A, B, C and D, only one of them is correct. Put an **X** over the letter corresponding to the correct answer.
- 3) In case you change your mind and wish to change your choice, put a circle round the already crossed letter like this **(X)**. Only one letter with the clear **X** over it will be accepted.

SECTION A: GRAMMAR AND VOCUBALARY (20 marks)

You have learnt about prepositions, tenses, pronouns, vocabulary, comparisons, collective nouns and question tags. In section A, put an X over the letter corresponding to the word or phrase which best fills the blanks in the following sentences.

- 1) Did you _____ to the headteacher's house yesterday?
A) went B) go C) gone D) goes A B C D
- 2) The thief has been sent to _____.
A) caught B) cot C) court D) cut A B C D
- 3) A team is to players as a _____ is to teachers.
A) gang B) bunch C) bouquet D) staff A B C D
- 4) Don't _____ your time trying to steal.
A) waste B) waist C) wash D) waisted A B C D
- 5) This _____ is very clean.
A) sit B) seat C) seats D) sight A B C D



- 6) We lived in Bamenda _____ five years.
A) to B) for C) till D) since A B C D
- 7) If you want to pass your exams you must work _____
A) had B) heart C) hard D) heard A B C D
- 8) The man was shot dead with a _____
A) gun B) gum C) gong D) gone. A B C D
- 9) Travelling _____ ship in a storm is very risky.
A) on B) in C) by D) at A B C D
- 10) I _____ the news of her death over the radio.
A) received B) recieved C) receive D) reverse A B C D
- 11) English is my _____ subject.
A) best B) good C) better D) more best A B C D
- 12) He has _____ the black hat.
A) choose B) chose C) chosen D) choosed A B C D
- 13) The two boys clean _____ bicycles daily.
A) them B) their C) theirs D) there A B C D
- 14) Neither John _____ Peter is guilty.
A) or B) either C) nor D) neither nor A B C D
- 15) This is my _____ shoe.
A) sister B) sisters C) Sisters' D) sister's A B C D
- 16) The market women wanted high _____ for their goods.
A) prizes B) price C) prices D) praise A B C D
- 17) That man is not tall, _____?
A) isn't B) isn't he C) is he D) doesn't he A B C D

For questions 18 to 20, pick out the letter (A B C D) that stands for the odd word and mark an X over it.

- 18) A) wedding B) corpse C) funeral D) death A B C D
- 19) A) dirty B) nasty C) shabby D) neat A B C D
- 20) A) goat B) cat C) dog D) hen A B C D

SECTION B: READING COMPREHENSIVE (20 marks)

The passage below tells the story of an honest man. Read it carefully and answer the questions that follow in the spaces provided.

Pa Andreas was a poor but very kind, honest and truthful catechist. He was loved by all the white Reverend Fathers who came from Europe and took their turns in the parish, where he worked. They used to offer him many things like clothes and food but never money.

Pa Andreas had a lone child, a daughter, by name Dora who was exceptionally intelligent and kept telling her father she would like to study in one of the European universities after her "A levels". This made her father worried because he could not meet her daughter's ambition. Finally, when she made her "A levels", her father wrote to one of his former Reverend Fathers, now back on retirement in Europe, about Dora's wish. This Reverend gentleman offered Dora a scholarship on the condition that Pa Andreas would pay Dora's fare to Europe. To meet this condition, Pa Andreas kept every franc that came his way for the next two years. These savings, however, could not buy Dora an air ticket and so, she had to go to Europe by ship.

When the day came, she paid her fare and took her seat in the ship and had nothing left for her food through out the journey.

The journey began in the evening. In the morning, when the bell was rung for breakfast, Dora did not go because she did not have money to pay for the food. Lunch and supper came and passed in the same way. The second day came and passed like the first. On the third day, she couldn't stand the hunger. She decided to take breakfast on credit. When everyone had eaten and gone, Dora asked the waiter for her bill. The waiter told her that she had no bill to pay because, when one has paid one's fare, drinks and snacks are free on board the ship.

QUESTIONS

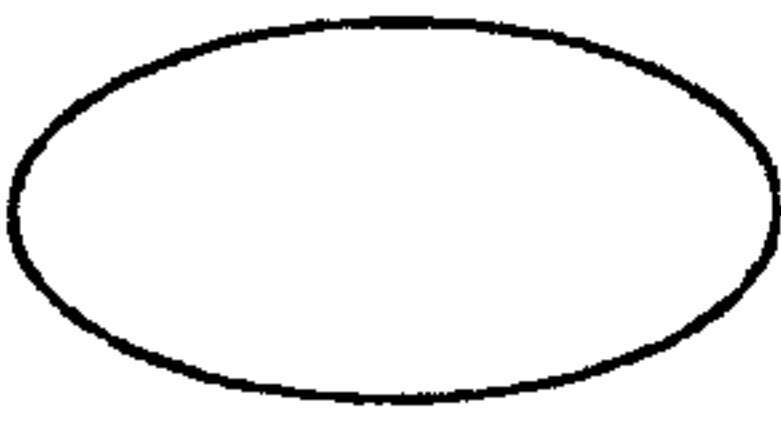
Answer all the questions. Each question carries 1 mark. From question 1 to 6 you put an X over the letter of the correct answer.

1. How many children had Pa Andreas?
A) two children. B) no children. C) one child. D) three children. A B C D
2. Why was Pa Andreas unable to meet Dora's ambition? Because he was _____
A) very rich. B) wicked. C) poor. D) truthful. A B C D
3. How long did Dora's father take to save money for her fare?
A) three years. B) no time. C) a very long time. D) two years. A B C D
4. How did the retire Reverend Father know Dora's wish?
A) Dora wrote to him. B) Pa Andreas wrote to him. C) by magic. D) he prayed. A B C D
5. How many meals did Dora miss?
A) 3 B) 6 C) 5 D) 7 A B C D
6. What was Dora going to Europe for?
A) for studies. B) to marry. C) for sight-seeing. D) she was just wondering. A B C D
7. Give one word to explain why Dora went to breakfast on the third day _____

FIRST SCHOOL LEAVING CERTIFICATE EXAMINATION - 2012 SESSION

SUBJECT: ENGLISH LANGUAGE PAPER II	NAME: _____
	EXAM. NO: _____
	CENTRE CODE: _____
	Do not write here. ↓ CODE: _____

For Official Use Only

Score: 	
Marked by: _____ (Name and Signature)	Do not write here. ↓ CODE: _____
Checked by: _____	

**FIRST SCHOOL LEAVING CERTIFICATE EXAMINATION - 2012 SESSION
ENGLISH LANGUAGE PAPER II**

Time Allowed: 60 Minutes.

GENERAL INSTRUCTIONS:

Read the instructions carefully before attempting to answer any question.

- 1) Answer all the questions in sections A, B and C.
- 2) In sections where you have to choose one out of four possible answers A, B, C and D, only one of them is correct. Put an **X** over the letter corresponding to the correct answer.
- 3) In case you change your mind and wish to change your choice, put a circle round the already crossed letter like this **(X)**. Only one letter with the clear **X** over it will be accepted.

SECTION A: GRAMMAR AND VOCUBALARY (20 marks)

You have learnt about prepositions, tenses, pronouns, vocabulary, comparisons, collective nouns and question tags. In section A, put an X over the letter corresponding to the word or phrase which best fills the blanks in the following sentences.

- 1) Did you _____ to the headteacher's house yesterday?
A) went B) go C) gone D) goes A B C D
- 2) The thief has been sent to _____.
A) caught B) cot C) court D) cut A B C D
- 3) A team is to players as a _____ is to teachers.
A) gang B) bunch C) bouquet D) staff A B C D
- 4) Don't _____ your time trying to steal.
A) waste B) waist C) wash D) waisted A B C D
- 5) This _____ is very clean.
A) sit B) seat C) seats D) sight A B C D

FIRST SCHOOL LEAVING CERTIFICATE EXAMINATION - 2012 SESSION

SUBJECT:
MATHEMATICS PAPER II

NAME: _____

EXAM. NO: _____

CENTRE CODE: _____

Do not write here. ↓
CODE: _____

For Official Use Only

Score: ○

Marked by: _____
(Name and Signature)

Checked by: _____

Do not write here. ↓
CODE: _____

FIRST SCHOOL LEAVING CERTIFICATE EXAMINATION - 2012 SESSION

MATHEMATICS PAPER II *Time Allowed: 90 minutes*

INSTRUCTIONS:

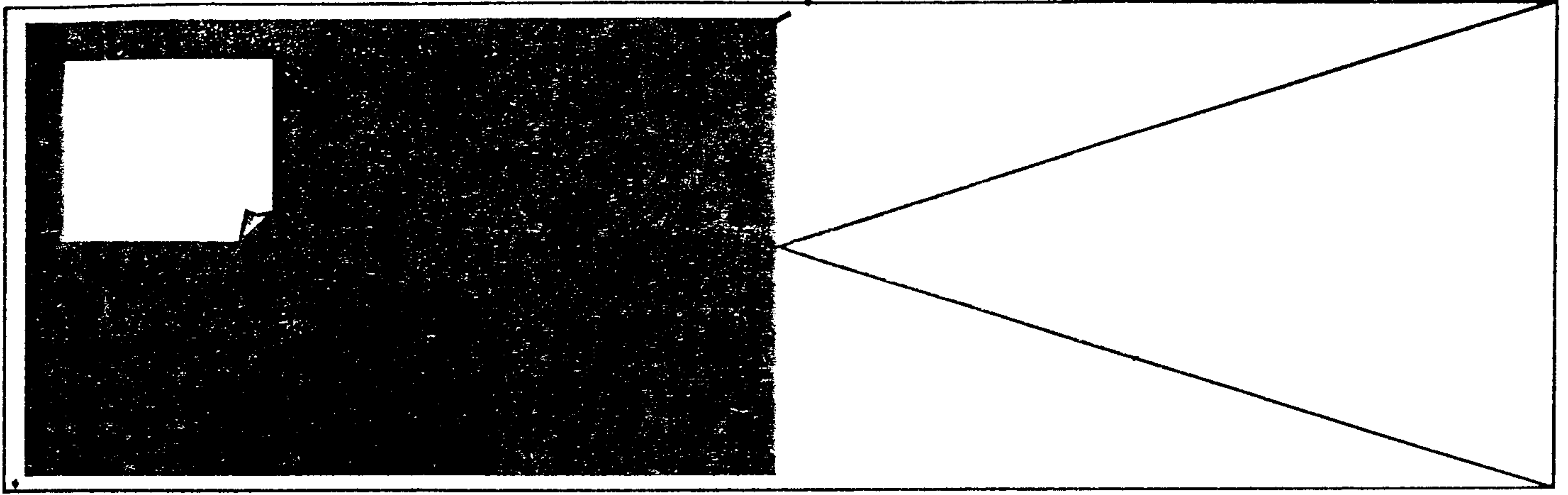
Answer all the questions in the spaces provided after each problem. They all carry equal marks. You will lose marks if you do not show full and clear statements.

1). a). In your cupboard at home, there are 150 plates. One third of them are green in colour, two-fifths of the remainder are blue and the rest are red. How many of the plates are red? (5 marks)

b). Using your knowledge on decimals;

Solve: $\frac{3.7 \times 0.93 \times 02.10}{0.45 \times 7.4 \times 3.5}$

(5 marks)

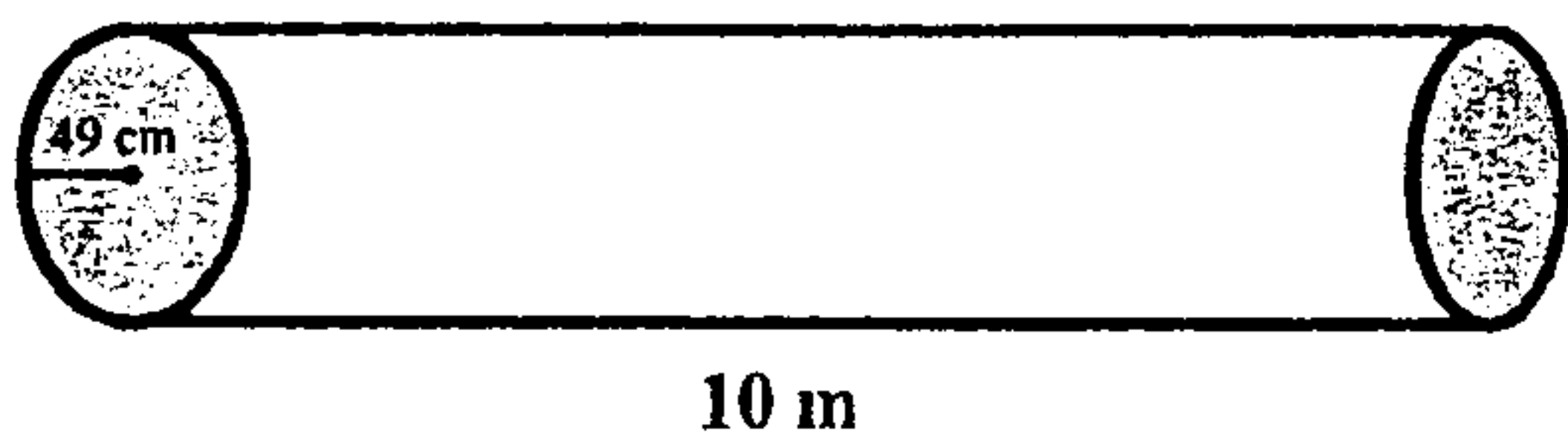


- 2). a). Mary is thrice as old as Peter who is 25 years old, while Joan is 10 years younger than Peter.
 i) What is Mary's age? (3 marks)

ii) How old is Joan? (2 marks)

- b). In a certain boarding Secondary school, 12 bags of garri fed 20 students in 32 days. For how long will 36 students eat 18 bags of garri, eating at the same rate? (5 marks)

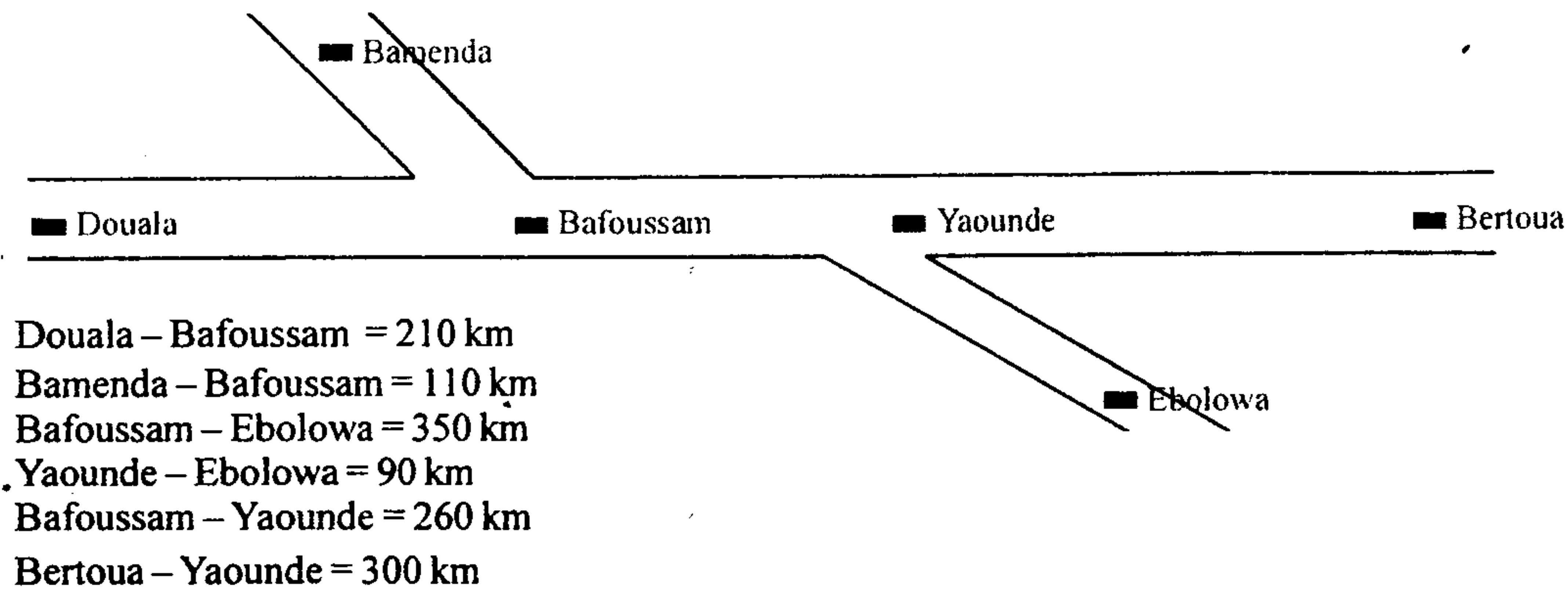
- 3) The cylindrical pipe below measures 10 m long and has a radius of 49 cm. Study it carefully and answer the questions below:



- a). What is the volume of the pipe? (6 marks)

b). Find the cost of the total volume of water, if 1 cube meter of water costs 75 frs. **(4 marks)**

4) Carefully study the distances on the figure below and answer the questions which follow.



a). How far is it from Douala to Bamenda? **(2 marks)**

b). How far is it from Bafoussam to Bertoua? **(2 marks)**

c) How far is it to go from Bamenda to Ebolowa? **(2 marks)**

d). A boy goes from Ebolowa to Bamenda and back to Douala. How much distance has he covered? **(4 marks)**

5) During the first sequence test a class six teacher had the following results in Maths, English and French:

15 pupils passed in Maths only.	3 in Maths and French.
14 pupils passed in English only.	4 in English and French and.
11 in French only.	7 in all the three subjects.
6 passed in Maths and English.	

a). Present the above information in a Venn diagram. **(2 marks)**

b). How many pupils are in that class? **(2 marks)**

- c). How many passed in Maths? (2 marks)
- d). How many passed in French? (2 marks)
- e). How many passed in English? (2 marks)
- 6) There are many means of movement. My father was going to Nigeria and he did $\frac{5}{9}$ of his journey by air, $\frac{3}{4}$ of the remainder by bus and completed the remaining 3 km on foot.
- a). How long was the journey? (7 marks)
- b). He spent 175 frs per km on the average. How much did he spend for the whole journey? (3 marks)
- 7). Buying and selling is business and yields profit or loss.
The teacher bought a car for 800,000frs and later sold it to his sister at a loss of 20%. She later repainted the car and sold it at a profit of 30%.
- a). How much did the teacher sell the car? (5 marks)
- b) How much did the sister sell the car? (5 marks)

FIRST SCHOOL LEAVING CERTIFICATE EXAMINATION - 2012 SESSION

SUBJECT:
GENERAL PAPER II

NAME: _____

EXAM. NO: _____

CENTRE CODE: _____

Do not write here.

CODE:

For Official Use Only

Score: 

Marked by: _____

(Name and Signature)

Checked by: _____

Do not write here.

CODE:

FIRST SCHOOL LEAVING CERTIFICATE EXAMINATION - 2012 SESSION

GENERAL PAPER II (40 marks)

Time Allowed : 60 Minutes.

(HEALTH EDUCATION , ENVIRONMENTAL EDUCATION AND HOME ECONOMICS)

Answer all Questions.

SECTION A: HEALTH EDUCATION (15 marks)

For Questions 1 – 5, provide the answers in the spaces provided. (5 marks)

- 1). When a pupil sustains an injury in school, he / she is administered First Aid. Name one item found in the First Aid box. _____
- 2). Malaria can be prevented by keeping our surroundings clean. What does a dirty environment attract that can cause malaria? _____
- 3). There are some diseases that can be contracted by getting close to someone suffering from them. Name any one of such diseases. _____
- 4). There are various types of latrines. Name the type used in your home. _____
- 5). Vaccination is a method used to check some diseases. Write down the name of any vaccine you know. _____

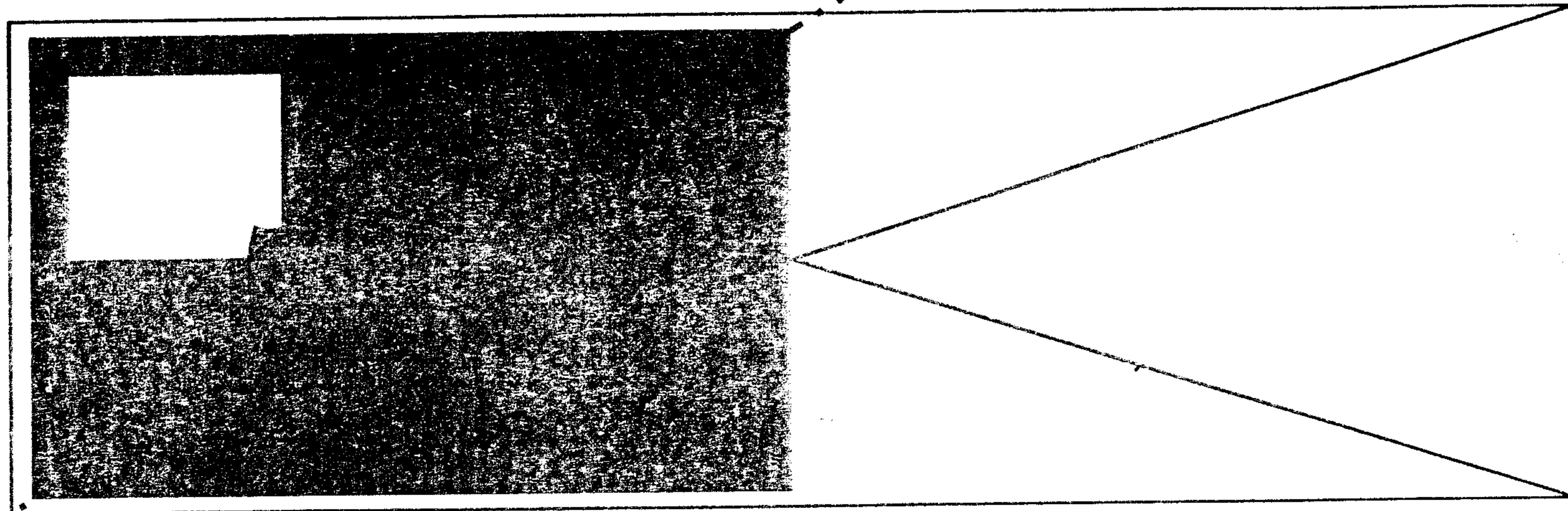
For questions 6 – 10, select answers from the list of answers below. (5 marks)

The statements below describe the functioning of some body systems. Write down the function that is best described.

- 6). The movement of a piece of meat from the mouth to the anus. _____
- 7). Giving birth to a young one of the same specie. _____
- 8). Sending out waste matter from the body. _____
- 9). Taking in and sending out of air. _____
- 10). Movement of blood from the heart to other parts of the body. _____

Answers:

Excretion, Reproduction, Transpiration, Circulation, Digestion, Respiration



Match column A with column C by writing the Number of the phrase in column A that best describes the action in column C in the answer column.

Column A	Answer Column	Column C
11). Taking in more food than necessary		Pollution
12). Staying away from sexual intercourse until the right moment.		Ventilation
13). The act of letting light through doors and windows.		Overfeeding
14). A broken bone through an accident.		Abstinence
15). Littering the environment with waste matter.		Fracture

SECTION B : ENVIRONMENTAL EDUCATION. (15 marks)

For questions 1 – 4, fill the answers in the blank spaces provided. (5 marks)

- 1). Plants have either one seed leaf or two seed leaves. Name a plant with one seed leaf. (1 mark)

- 2). Some animals eat grass (herbivorous) while others eat flesh (carnivorous).
State: (i). A herbivorous animal _____ (1 mark)
(ii). A carnivorous animal _____ (1 mark)
- 3). Erosion is the washing away of top soil either by water or wind.
One way that erosion can be checked is by _____ (1 mark)
- 4). Most countries get revenue by exporting cash crops. Name any cash crop produced in Cameroon. _____ (1 mark)

The following groups of words numbered 5 to 10 have common characteristics except one. Underline the odd one in each group. (6 marks)

- 5). Ovary, stigma, wings, petals, style.
- 6). Clearing, washing, tilling, mulching, weeding.
- 7). Movement, growth, reproduction, excretion, stagnation.

- 8). Mosquitoes, housefly, elephants, grasshopper, cricket.
- 9). Mango, plantains, orange, pineapple, pawpaw.
- 10). Parrots, sparrow, tilapia, hawk, eagle.

The following processes take place in the plants. Write down the part of the plant in which they occur. Select answers from the list below. (4 marks)

- 11). A stronger solution drawing a weaker one (Osmosis). _____
- 12). Plant manufacture of food (photosynthesis). _____
- 13). Movement of water from the roots to the leaves (transport). _____
- 14). Transfer of pollen grains from the anthers to the stigma. _____

Answers: stem, flowers, fruits, leaves, roots

SECTION C : HOME ECONOMICIS (10 marks)

I - Food and Nutrition (2 marks)

- 1). Meals are planned following the sex, age and occupation of those to eat. Name any type of food which is good for a grandmother of 70 years. _____

Say why _____

- 2). A dessert is food taken after a main meal. Name any one dessert you know.

II - Laundry (2 marks)

- 1). Stains on clothes should be removed during laundry. Name any detergent that can be used to remove stains on clothes. _____

- 2). Drying lines are placed in the sun for washed clothes to be dried. Give one other reason why it is good to dry clothes in the sun. _____

III - House Craft. (2 marks)

- 1). The house is partitioned into various parts: room, parlour and kitchen. Name two equipments found in the:

i). Room: _____ and _____ (1/2 mark)

ii). Kitchen: _____ and _____ (1/2 mark)

- 2). Most house hold equipments are made out of wood. State two ways by which we can care for wooden equipments.

i). _____ (1/2 mark)

ii). _____ (1/2 mark)

IV - Mother Care (2 marks)

Provide answers in the spaces provided:

When a woman is pregnant, she prepares for childbirth by buying some items.

1). State two items she buys for herself:

i) _____ ii) _____ (1/2 mark)

2). State two items she buys for the expected baby.

i) _____ ii) _____ (1/2 mark)

V - Needle Work (2 marks)

1) Your mother has a sewing room. State two equipments found in a sewing room.

i) _____ ii) _____ (1/2 mark)

2) During pregnancy, you want to stitch a dress for your expected baby. Underline any two fastenings recommended for such a dress from the list below. (1/2 mark)

Zip, ribbon to tie, hook and eye, button and loop